

Contents

Problems 2
Solutions 6

Problems

Problem 1

Show that

$$\cos(56^\circ) \cdot \cos(2 \cdot 56^\circ) \cdot \cos(2^2 \cdot 56^\circ) \cdot \dots \cdot \cos(2^{23} \cdot 56^\circ) = \frac{1}{2^{24}}.$$

Problem 2

Let a_0, a_1, \dots, a_N be real numbers satisfying $a_0 = a_N = 0$ and

$$a_{i+1} - 2a_i + a_{i-1} = a_i^2$$

for $i = 1, 2, \dots, N - 1$. Prove that $a_i \leq 0$ for $i = 1, 2, \dots, N - 1$.

Problem 3

Positive real numbers a, b, c satisfy $\frac{1}{a} + \frac{1}{b} + \frac{1}{c} = 3$. Prove the inequality

$$\frac{1}{\sqrt{a^3 + b}} + \frac{1}{\sqrt{b^3 + c}} + \frac{1}{\sqrt{c^3 + a}} \leq \frac{3}{\sqrt{2}}.$$

Problem 4

Find all functions f defined on all real numbers and taking real values such that

$$f(f(y)) + f(x - y) = f(xf(y) - x)$$

for all real numbers x, y .

Problem 5

Given positive real numbers a, b, c, d that satisfy equalities

$$a^2 + d^2 - ad = b^2 + c^2 + bc \quad \text{and} \quad a^2 + b^2 = c^2 + d^2,$$

find all possible values of the expression $\frac{ab+cd}{ad+bc}$.

Problem 6

In how many ways can we paint 16 seats in a row, each red or green, in such a way that the number of consecutive seats painted in the same colour is always odd?

Problem 7

Let p_1, p_2, \dots, p_{30} be a permutation of the numbers $1, 2, \dots, 30$. For how many permutations does the equality $\sum_{k=1}^{30} |p_k - k| = 450$ hold?

Problem 8

Albert and Betty are playing the following game. There are 100 blue balls in a red bowl and 100 red balls in a blue bowl. In each turn a player must make one of the following moves:

- a) Take two red balls from the blue bowl and put them in the red bowl.
- b) Take two blue balls from the red bowl and put them in the blue bowl.
- c) Take two balls of different colors from one bowl and throw the balls away.

They take alternate turns and Albert starts. The player who first takes the last red ball from the blue bowl or the last blue ball from the red bowl wins. Determine who has a winning strategy.

Problem 9

What is the least possible number of cells that can be marked on an $n \times n$ board such that for each $m > \frac{n}{2}$ both diagonals of any $m \times m$ sub-board contain a marked cell?

Problem 10

In a country there are 100 airports. Super-Air operates direct flights between some pairs of airports (in both directions). The *traffic* of an airport is the number of airports it has a direct Super-Air connection with. A new company, Concur-Air, establishes a direct flight between two airports if and only if the sum of their traffics is at least 100. It turns out that there exists a round-trip of Concur-Air flights that lands in every airport exactly once. Show that then there also exists a round-trip of Super-Air flights that lands in every airport exactly once.

Problem 11

Let Γ be the circumcircle of an acute triangle ABC . The perpendicular to AB from C meets AB at D and Γ again at E . The bisector of angle C meets AB at F and Γ again at G . The line GD meets Γ again at H and the line HF meets Γ again at I . Prove that $AI = EB$.

Problem 12

Triangle ABC is given. Let M be the midpoint of the segment AB and T be the midpoint of the arc BC not containing A of the circumcircle of ABC . The point K inside the triangle ABC is such that $MATK$ is an isosceles trapezoid with $AT \parallel MK$. Show that $AK = KC$.

Problem 13

Let $ABCD$ be a square inscribed in a circle ω and let P be a point on the shorter arc AB of ω . Let $CP \cap BD = R$ and $DP \cap AC = S$. Show that triangles ARB and DSR have equal areas.

Problem 14

Let $ABCD$ be a convex quadrilateral such that the line BD bisects the angle ABC . The circumcircle of triangle ABC intersects the sides AD and CD in the points P and Q , respectively. The line through D and parallel to AC intersects the lines BC and BA at the points R and S , respectively. Prove that the points P , Q , R and S lie on a common circle.

Problem 15

The sum of the angles A and C of a convex quadrilateral $ABCD$ is less than 180° . Prove that

$$AB \cdot CD + AD \cdot BC < AC(AB + AD).$$

Problem 16

Determine whether $712! + 1$ is a prime number.

Problem 17

Do there exist pairwise distinct rational numbers x , y and z such that

$$\frac{1}{(x-y)^2} + \frac{1}{(y-z)^2} + \frac{1}{(z-x)^2} = 2014?$$

Problem 18

Let p be a prime number, and let n be a positive integer. Find the number of quadruples (a_1, a_2, a_3, a_4) with $a_i \in \{0, 1, \dots, p^n - 1\}$ for $i = 1, 2, 3, 4$ such that

$$p^n \mid (a_1 a_2 + a_3 a_4 + 1).$$

Problem 19

Let m and n be relatively prime positive integers. Determine all possible values of

$$\gcd(2^m - 2^n, 2^{m^2+mn+n^2} - 1).$$

Problem 20

Consider a sequence of positive integers a_1, a_2, a_3, \dots such that for $k \geq 2$ we have

$$a_{k+1} = \frac{a_k + a_{k-1}}{2015^i},$$

where 2015^i is the maximal power of 2015 that divides $a_k + a_{k-1}$. Prove that if this sequence is periodic then its period is divisible by 3.

Solutions

Problem 1

Show that

$$\cos(56^\circ) \cdot \cos(2 \cdot 56^\circ) \cdot \cos(2^2 \cdot 56^\circ) \cdot \dots \cdot \cos(2^{23} \cdot 56^\circ) = \frac{1}{2^{24}}.$$

Solution. We start by rewriting the expression as follows:

$$\cos(56^\circ) \cdot \cos(2 \cdot 56^\circ) \cdot \dots \cdot \cos(2^{23} \cdot 56^\circ) = \frac{\sin(56^\circ) \cdot \cos(56^\circ) \cdot \cos(2 \cdot 56^\circ) \cdot \dots \cdot \cos(2^{23} \cdot 56^\circ)}{\sin(56^\circ)}.$$

Now, by applying the double-angle formula $\sin(x) \cos(x) = \sin(2x)/2$ to $x = 56^\circ$, we obtain

$$\begin{aligned} & \frac{\sin(56^\circ) \cdot \cos(56^\circ) \cdot \cos(2 \cdot 56^\circ) \cdot \dots \cdot \cos(2^{23} \cdot 56^\circ)}{\sin(56^\circ)} \\ &= \frac{\sin(2 \cdot 56^\circ) \cdot \cos(2 \cdot 56^\circ) \cdot \dots \cdot \cos(2^{23} \cdot 56^\circ)}{2 \cdot \sin(56^\circ)}. \end{aligned}$$

Similarly, by applying the double-angle formula 24 times, we get

$$\cos(56^\circ) \cdot \cos(2 \cdot 56^\circ) \cdot \dots \cdot \cos(2^{23} \cdot 56^\circ) = \frac{\sin(2^{24} \cdot 56^\circ)}{2^{24} \cdot \sin(56^\circ)}.$$

It remains to prove that $\sin(2^{24} \cdot 56^\circ) = \sin(56^\circ)$. If we can show that

$$2^{24} \cdot 56 = 360 \cdot k + 56$$

for some integer k , then the desired equality follows by the periodicity of the sine function.

Note that

$$k = \frac{2^{24} \cdot 56 - 56}{360} = 7 \cdot \frac{2^{24} - 1}{45}.$$

Since $\varphi(45) = 24$, the Euler theorem implies that k is indeed an integer, as claimed. ◀

Problem 2

Let a_0, a_1, \dots, a_N be real numbers satisfying $a_0 = a_N = 0$ and

$$a_{i+1} - 2a_i + a_{i-1} = a_i^2$$

for $i = 1, 2, \dots, N - 1$. Prove that $a_i \leq 0$ for $i = 1, 2, \dots, N - 1$.

Solution. Assume the contrary. Then, there is an index i for which $a_i = \max_{0 \leq j \leq N} a_j$ and $a_i > 0$. This i cannot be equal to 0 or N , since $a_0 = a_N = 0$. Thus, from $a_i \geq a_{i-1}$ and $a_i \geq a_{i+1}$ we obtain $0 < a_i^2 = (a_{i+1} - a_i) + (a_{i-1} - a_i) \leq 0$, which is a contradiction. ◀

Problem 3

Positive real numbers a, b, c satisfy $\frac{1}{a} + \frac{1}{b} + \frac{1}{c} = 3$. Prove the inequality

$$\frac{1}{\sqrt{a^3 + b}} + \frac{1}{\sqrt{b^3 + c}} + \frac{1}{\sqrt{c^3 + a}} \leq \frac{3}{\sqrt{2}}.$$

Solution. Applying several AM-GM inequalities (and using $1/a + 1/b + 1/c = 3$) we obtain

$$\begin{aligned} \frac{1}{\sqrt{a^3 + b}} + \frac{1}{\sqrt{b^3 + c}} + \frac{1}{\sqrt{c^3 + a}} &\leq \frac{1}{\sqrt{2a\sqrt{ab}}} + \frac{1}{\sqrt{2b\sqrt{bc}}} + \frac{1}{\sqrt{2c\sqrt{ca}}} \\ &= \frac{1}{\sqrt{2}} \left(\frac{\sqrt{a\sqrt{ab}}}{a\sqrt{ab}} + \frac{\sqrt{b\sqrt{bc}}}{b\sqrt{bc}} + \frac{\sqrt{c\sqrt{ca}}}{c\sqrt{ca}} \right) \\ &\leq \frac{1}{2\sqrt{2}} \left(\frac{a + \sqrt{ab}}{a\sqrt{ab}} + \frac{b + \sqrt{bc}}{b\sqrt{bc}} + \frac{c + \sqrt{ca}}{c\sqrt{ca}} \right) \\ &= \frac{1}{2\sqrt{2}} \left(3 + \frac{1}{\sqrt{ab}} + \frac{1}{\sqrt{bc}} + \frac{1}{\sqrt{ca}} \right) \\ &= \frac{1}{2\sqrt{2}} \left(3 + \frac{\sqrt{ab}}{ab} + \frac{\sqrt{bc}}{bc} + \frac{\sqrt{ca}}{ca} \right) \\ &\leq \frac{1}{2\sqrt{2}} \left(3 + \frac{a+b}{2ab} + \frac{b+c}{2bc} + \frac{c+a}{2ac} \right) \\ &= \frac{1}{2\sqrt{2}} (3 + 3) = \frac{3}{\sqrt{2}}. \quad \blacktriangleleft \end{aligned}$$

Problem 4

Find all functions f defined on all real numbers and taking real values such that

$$f(f(y)) + f(x - y) = f(xf(y) - x)$$

for all real numbers x, y .

Answer: $f(x) = 0$.

Solution. Substituting $x = y = 0$ into the original equality gives $f(f(0)) + f(0) = f(0)$, implying

$$f(f(0)) = 0. \tag{1}$$

Selecting $x = \frac{f(0)}{2}$ and $y = f(0)$ in the original equality gives

$$f(f(f(0))) + f\left(-\frac{f(0)}{2}\right) = f\left(\frac{f(0)}{2} \cdot f(f(0)) - \frac{f(0)}{2}\right).$$

Applying (1) here leads to $f(0) + f\left(-\frac{f(0)}{2}\right) = f\left(-\frac{f(0)}{2}\right)$ which yields

$$f(0) = 0. \tag{2}$$

Substituting $y = 0$ into the original equation we obtain $f(f(0)) + f(x) = f(xf(0) - x)$, which in the light of (2) reduces to

$$f(x) = f(-x) \tag{3}$$

for all x . Finally, let us substitute $x = 0$ into the original equation. In the light of (2) and (3), we obtain $f(f(y)) + f(y) = 0$, i. e.,

$$f(f(y)) = -f(y) \tag{4}$$

for all real numbers y . Now, for each real y , we have

$$\begin{aligned} f(y) &= -f(f(y)) && \text{(by (4))} \\ &= f(f(f(y))) && \text{(by (4))} \\ &= f(-f(y)) && \text{(by (4))} \\ &= f(f(y)) && \text{(by (3))} \\ &= -f(y), && \text{(by (4))} \end{aligned}$$

so that $f(y) = 0$. ◀

Problem 5

Given positive real numbers a, b, c, d that satisfy equalities

$$a^2 + d^2 - ad = b^2 + c^2 + bc \quad \text{and} \quad a^2 + b^2 = c^2 + d^2,$$

find all possible values of the expression $\frac{ab+cd}{ad+bc}$.

Answer: $\frac{\sqrt{3}}{2}$.

Solution 1. Let A_1BC_1 be a triangle with $A_1B = b$, $BC_1 = c$ and $\angle A_1BC_1 = 120^\circ$, and let C_2DA_2 be another triangle with $C_2D = d$, $DA_2 = a$ and $\angle C_2DA_2 = 60^\circ$. By the law of cosines and the assumption $a^2 + d^2 - ad = b^2 + c^2 + bc$, we have $A_1C_1 = A_2C_2$. Thus, the two triangles can be put together to form a quadrilateral $ABCD$ with $AB = b$, $BC = c$, $CD = d$, $DA = a$ and $\angle ABC = 120^\circ$, $\angle CDA = 60^\circ$. Then $\angle DAB + \angle BCD = 360^\circ - (\angle ABC + \angle CDA) = 180^\circ$.

Suppose that $\angle DAB > 90^\circ$. Then $\angle BCD < 90^\circ$, whence $a^2 + b^2 < BD^2 < c^2 + d^2$, contradicting the assumption $a^2 + b^2 = c^2 + d^2$. By symmetry, $\angle DAB < 90^\circ$ also leads to a contradiction. Hence, $\angle DAB = \angle BCD = 90^\circ$. Now, let us calculate the area of $ABCD$ in two ways: on one hand, it equals $\frac{1}{2}ad \sin 60^\circ + \frac{1}{2}bc \sin 120^\circ$ or $\frac{\sqrt{3}}{4}(ad + bc)$. On the other hand, it equals $\frac{1}{2}ab + \frac{1}{2}cd$ or $\frac{1}{2}(ab + cd)$. Consequently,

$$\frac{ab + cd}{ad + bc} = \frac{\frac{\sqrt{3}}{4}}{\frac{1}{2}} = \frac{\sqrt{3}}{2}. \quad \blacktriangleleft$$

Solution 2. Setting $T^2 = a^2 + b^2 = c^2 + d^2$, where $T > 0$, we can write

$$a = T \sin \alpha, \quad b = T \cos \alpha, \quad c = T \sin \beta, \quad d = T \cos \beta$$

for some $\alpha, \beta \in (0, \pi/2)$. With this notation, the first equality gives

$$\sin^2 \alpha + \cos^2 \beta - \sin \alpha \cos \beta = \sin^2 \beta + \cos^2 \alpha + \cos \alpha \sin \beta.$$

Hence, $\cos(2\beta) - \cos(2\alpha) = \sin(\alpha + \beta)$. Since $\cos(2\beta) - \cos(2\alpha) = 2 \sin(\alpha - \beta) \sin(\alpha + \beta)$ and $\sin(\alpha + \beta) \neq 0$, this yields $\sin(\alpha - \beta) = 1/2$. Thus, in view of $\alpha - \beta \in (-\pi/2, \pi/2)$ we deduce that $\cos(\alpha - \beta) = \sqrt{1 - \sin^2(\alpha - \beta)} = \sqrt{3}/2$.

Now, observing that $ab + cd = \frac{T^2}{2}(\sin(2\alpha) + \sin(2\beta)) = T^2 \sin(\alpha + \beta) \cos(\alpha - \beta)$ and $ad + bc = T^2 \sin(\alpha + \beta)$, we obtain $(ab + cd)/(ad + bc) = \cos(\alpha - \beta) = \sqrt{3}/2$. \blacktriangleleft

Problem 6

In how many ways can we paint 16 seats in a row, each red or green, in such a way that the number of consecutive seats painted in the same colour is always odd?

Answer: 1974.

Solution. Let g_k, r_k be the numbers of possible odd paintings of k seats such that the first seat is painted green or red, respectively. Obviously, $g_k = r_k$ for any k . Note that $g_k = r_{k-1} + g_{k-2} = g_{k-1} + g_{k-2}$, since r_{k-1} is the number of odd paintings with first seat green and second seat red and g_{k-2} is the number of odd paintings with first and second seats green. Moreover, $g_1 = g_2 = 1$, so g_k is the k th element of the Fibonacci sequence. Hence, the number of ways to paint n seats in a row is $g_n + r_n = 2f_n$. Inserting $n = 16$ we obtain $2f_{16} = 2 \cdot 987 = 1974$. ◀

Problem 7

Let p_1, p_2, \dots, p_{30} be a permutation of the numbers $1, 2, \dots, 30$. For how many permutations does the equality $\sum_{k=1}^{30} |p_k - k| = 450$ hold?

Answer: $(15!)^2$.

Solution. Let us define pairs (a_i, b_i) such that $\{a_i, b_i\} = \{p_i, i\}$ and $a_i \geq b_i$. Then for every $i = 1, \dots, 30$ we have $|p_i - i| = a_i - b_i$ and

$$\sum_{i=1}^{30} |p_i - i| = \sum_{i=1}^{30} (a_i - b_i) = \sum_{i=1}^{30} a_i - \sum_{i=1}^{30} b_i.$$

It is clear that the sum $\sum_{i=1}^{30} a_i - \sum_{i=1}^{30} b_i$ is maximal when

$$\{a_1, a_2, \dots, a_{30}\} = \{16, 17, \dots, 30\} \quad \text{and} \quad \{b_1, b_2, \dots, b_{30}\} = \{1, 2, \dots, 15\},$$

where exactly two a_i 's and two b_j 's are equal, and the maximal value equals

$$2(16 + \dots + 30 - 1 - \dots - 15) = 450.$$

The number of such permutations is $(15!)^2$. ◀

Problem 8

Albert and Betty are playing the following game. There are 100 blue balls in a red bowl and 100 red balls in a blue bowl. In each turn a player must make one of the following moves:

- a) Take two red balls from the blue bowl and put them in the red bowl.
- b) Take two blue balls from the red bowl and put them in the blue bowl.
- c) Take two balls of different colors from one bowl and throw the balls away.

They take alternate turns and Albert starts. The player who first takes the last red ball from the blue bowl or the last blue ball from the red bowl wins. Determine who has a winning strategy.

Answer: Betty has a winning strategy.

Solution. Betty follows the following strategy. If Albert makes move a), then Betty makes move b) and vice versa. If Albert makes move c) from one bowl, Betty makes move c) from the other bowl. The only exception of this rule is that if Betty can make a winning move, that is, a move where she removes the last blue ball from the red bowl, or the last red ball from the blue bowl, then she makes her winning move.

Firstly, we prove that it is possible to follow this strategy. Let

$$b = (\# \text{ red balls in the blue bowl, } \# \text{ blue balls in the blue bowl}),$$

$$r = (\# \text{ blue balls in the red bowl, } \# \text{ red balls in the red bowl}).$$

At the beginning $b = r = (100, 0)$. If $b = r$ and Albert takes a move a), then it must be possible for Betty to take a move b) and again leave a situation with $b = r$ to Albert. The same happens when Albert takes a move b). If $b = r$ and Albert takes a move c) from one bowl, then it is possible for Betty to take a move c) from the other bowl and again leave a situation with $b = r$. Thus, by following this strategy, Betty always leaves to Albert a situation with $b = r$ if she is not taking a winning move. Notice that there is one situation from which no legal move is possible, that is, $b = r = (1, 0)$, but this could not happen, because the number of balls in a bowl is always even. (It is either increased or decreased by 2, or doesn't change.)

Now, we will prove that, by using this strategy, Betty wins. Assume that at some point Albert wins, that is, he takes a winning move. Since, before his move, we have $b = r$, the situation was either $b = r = (1, s)$, $s \geq 1$, or $b = r = (2, t)$, $t \geq 0$. But that means that either b or r was either $(1, s')$, $s' \geq 1$ (because $1 + s'$ is even), or $(2, t')$, $t' \geq 0$,

before Betty made her last move. This is a contradiction with Betty's strategy, because in this situation Betty would have taken a winning move, and the game would have stopped. Hence, Betty always wins. ◀

Problem 9

What is the least possible number of cells that can be marked on an $n \times n$ board such that for each $m > \frac{n}{2}$ both diagonals of any $m \times m$ sub-board contain a marked cell?

Answer: n .

Solution. For any n it is possible to set n marks on the board and get the desired property, if they are simply put on every cell in row number $\lceil \frac{n}{2} \rceil$. We now show that n is also the minimum amount of marks needed.

If n is odd, then there are $2n$ series of diagonal cells of length $> \frac{n}{2}$ and both end cells on the edge of the board, and, since every mark on the board can at most lie on two of these diagonals, it is necessary to set at least n marks to have a mark on every one of them.

If n is even, then there are $2n - 2$ series of diagonal cells of length $> \frac{n}{2}$ and both end cells on the edge of the board. We call one of these diagonals even if every coordinate (x, y) on it satisfies $2 \mid x - y$ and odd else. It can be easily seen that this is well defined. Now, by symmetry, the number of odd and even diagonals is the same, so there are exactly $n - 1$ of each of them. Any mark set on the board can at most sit on two diagonals and these two have to be of the same kind. Thus, we will need at least $\frac{n}{2}$ marks for the even diagonals, since there are $n - 1$ of them and $2 \nmid n - 1$, and, similarly, we need at least $\frac{n}{2}$ marks for the the odd diagonals. So we need at least $\frac{n}{2} + \frac{n}{2} = n$ marks to get the desired property. ◀

Problem 10

In a country there are 100 airports. Super-Air operates direct flights between some pairs of airports (in both directions). The *traffic* of an airport is the number of airports it has a direct Super-Air connection with. A new company, Concur-Air, establishes a direct flight between two airports if and only if the sum of their traffics is at least 100. It turns out that there exists a round-trip of Concur-Air flights that lands in every airport exactly once. Show that then there also exists a round-trip of Super-Air flights that lands in every airport exactly once.

Solution. Let G and G' be two graphs corresponding to the flights of Super-Air and Concur-Air, respectively. Then the traffic of an airport is simply the degree of a corresponding vertex, and the assertion means that the graph G has a Hamiltonian cycle.

Lemma. *Let a graph H has 100 vertices and contains a Hamiltonian path (not cycle) that starts at the vertex A and ends in B . If the sum of degrees of vertices A and B is at least 100, then the graph H contains a Hamiltonian cycle.*

Proof. Put $N = \deg A$. Then $\deg B \geq 100 - N$. Let us enumerate the vertices along the Hamiltonian path: $C_1 = A, C_2, \dots, C_{100} = B$. Let C_p, C_q, C_r, \dots be the N vertices which are connected directly to A . Consider N preceding vertices: $C_{p-1}, C_{q-1}, C_{r-1}, \dots$. Since the remaining part of the graph H contains $100 - N$ vertices (including B) and $\deg B \geq 100 - N$, we conclude that at least one vertex under consideration, say C_{r-1} , is connected directly to B . Then

$$A = C_1 \rightarrow C_2 \rightarrow \dots \rightarrow C_{r-1} \rightarrow B = C_{100} \rightarrow C_{99} \rightarrow \dots \rightarrow C_r \rightarrow A$$

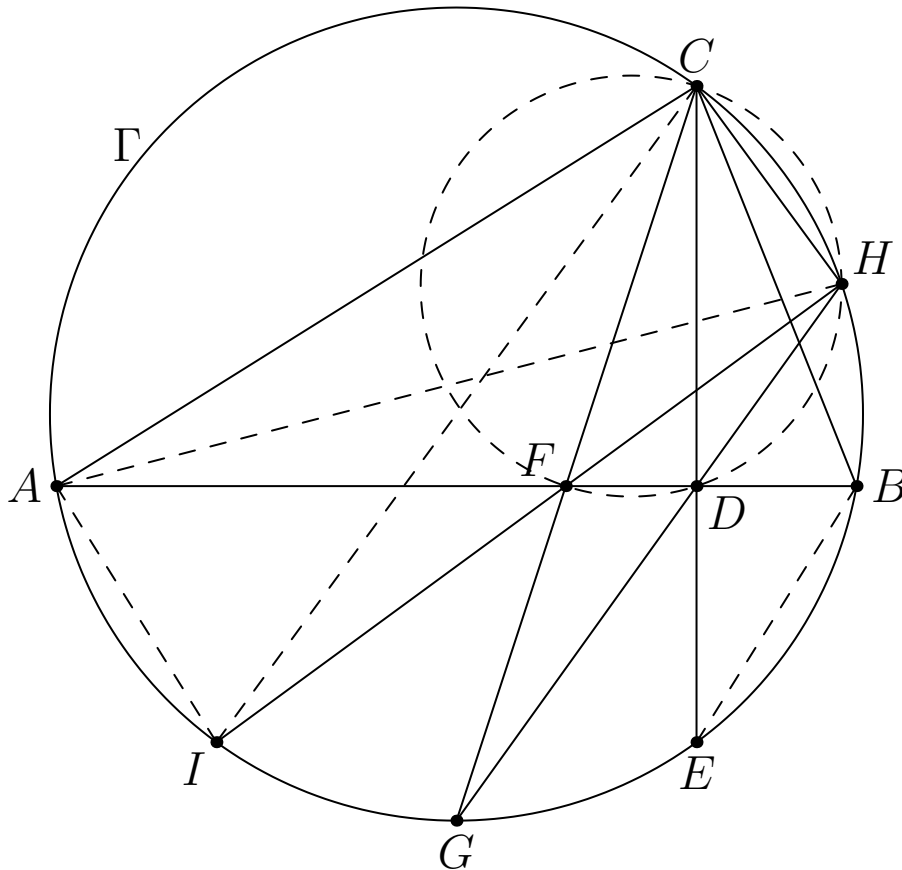
is a Hamiltonian cycle. ◀

Now, let us solve the problem. Assume that the graph G contains no Hamiltonian cycle. Consider arbitrary two vertices A and B not connected by an edge in the graph G but connected in G' . The latter means that $\deg A + \deg B \geq 100$ in the graph G . Let us add the edge AB to the graph G . By the lemma, there was no Hamiltonian path from A to B in the graph G . Therefore, the graph G still does not contain a Hamiltonian cycle after adding this new edge. By repeating this operation, we will obtain that all the vertices connected by an edge in the graph G' are also connected in the graph G and at the same time the graph G has no Hamiltonian cycle (in contrast to G'). This is a contradiction. ◀

Problem 11

Let Γ be the circumcircle of an acute triangle ABC . The perpendicular to AB from C meets AB at D and Γ again at E . The bisector of angle C meets AB at F and Γ again at G . The line GD meets Γ again at H and the line HF meets Γ again at I . Prove that $AI = EB$.

Solution. Since CG bisects $\angle ACB$, we have $\angle AHG = \angle ACG = \angle GCB$. Thus, from the triangle ADH we find that $\angle HDB = \angle HAB + \angle AHG = \angle HCB + \angle GCB = \angle GCH$. It follows that a pair of opposite angles in the quadrilateral $CFDH$ are supplementary, whence $CFDH$ is a cyclic quadrilateral. Thus, $\angle GCE = \angle FCD = \angle FHD = \angle IHG = \angle ICG$. In view of $\angle ACG = \angle GCB$ we obtain $\angle ACI = \angle ECB$, which implies $AI = EB$.



Problem 12

Triangle ABC is given. Let M be the midpoint of the segment AB and T be the midpoint of the arc BC not containing A of the circumcircle of ABC . The point K inside the triangle ABC is such that $MATK$ is an isosceles trapezoid with $AT \parallel MK$. Show that $AK = KC$.

Solution. Assume that TK intersects the circumcircle of ABC at the point S (where $S \neq T$). Then $\angle ABS = \angle ATS = \angle BAT$, so $ASBT$ is a trapezoid. Hence, $MK \parallel AT \parallel SB$ and M is the midpoint of AB . Thus, K is the midpoint of TS . From $\angle TAC = \angle BAT = \angle ATS$ we see that $ACTS$ is an inscribed trapezoid, so it is isosceles. Thus, $AK = KC$, since K is the midpoint of TS . ◀

Problem 13

Let $ABCD$ be a square inscribed in a circle ω and let P be a point on the shorter arc AB of ω . Let $CP \cap BD = R$ and $DP \cap AC = S$. Show that triangles ARB and DSR have equal areas.

Solution. Let $T = PC \cap AB$. Then $\angle BTC = 90^\circ - \angle PCB = 90^\circ - \angle PDB = 90^\circ - \angle SBD = \angle BSC$, thus the points B, S, T, C are concyclic. Hence $\angle TSC = 90^\circ$, and, therefore, $TS \parallel BD$. It follows that

$$[DSR] = [DTR] = [DTB] - [TBR] = [CTB] - [TBR] = [CRB] = [ARB],$$

where $[\Delta]$ denotes the area of a triangle Δ . ◀

Problem 14

Let $ABCD$ be a convex quadrilateral such that the line BD bisects the angle ABC . The circumcircle of triangle ABC intersects the sides AD and CD in the points P and Q , respectively. The line through D and parallel to AC intersects the lines BC and BA at the points R and S , respectively. Prove that the points P , Q , R and S lie on a common circle.

Solution 1. Since $\angle SDP = \angle CAP = \angle RBP$, the quadrilateral $BRDP$ is cyclic (see Figure 1). Similarly, the quadrilateral $BSDQ$ is cyclic. Let X be the second intersection point of the segment BD with the circumcircle of the triangle ABC . Then

$$\angle AXB = \angle ACB = \angle DRB,$$

and, moreover, $\angle ABX = \angle DBR$. It means that triangles ABX and DBR are similar. Thus

$$\angle RPB = \angle RDB = \angle XAB = \angle XPB,$$

which implies that the points R , X and P are collinear. Analogously, we can show that the points S , X and Q are collinear.

Thus, we obtain $RX \cdot XP = DX \cdot XB = SX \cdot XQ$, which proves that the points P , Q , R and S lie on a common circle.

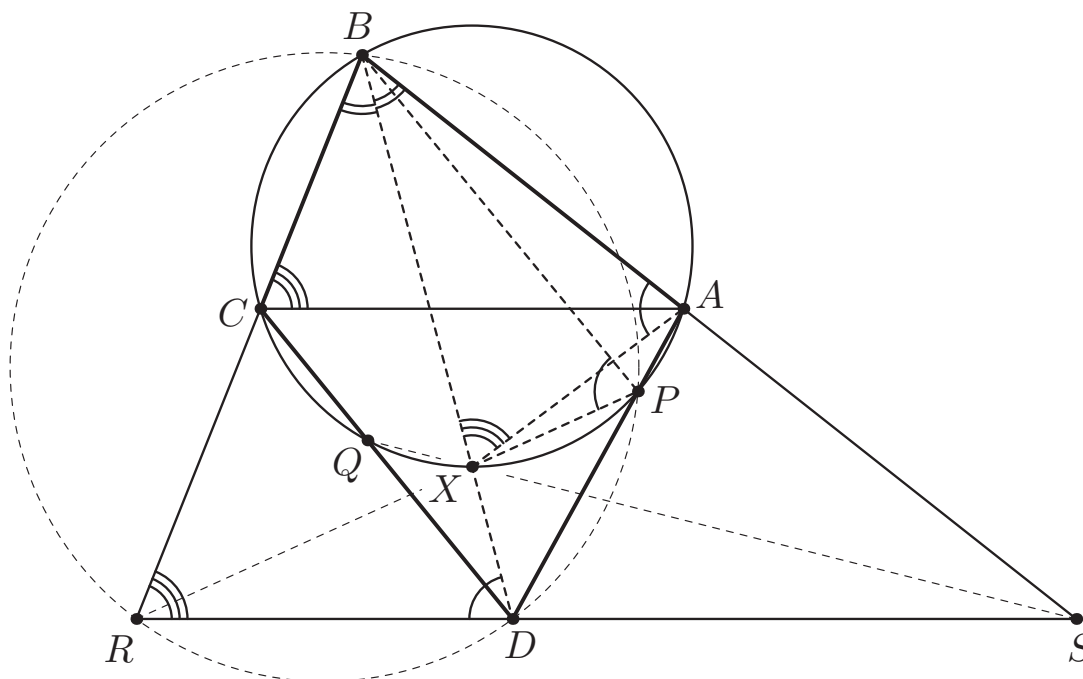


Figure 1



Solution 2. If $AB = BC$, then the points R and S are symmetric to each other with respect to the line BD . Similarly, the points P and Q are symmetric to each other with respect to the line BD . Therefore, $RSPQ$ is an isosceles trapezoid, so the claim follows.

Assume that $AB \neq BC$. Denote by ω the circumcircle of the triangle ABC (see Figure 2). Since the lines AC and SR are parallel, the dilation with center B , which takes A to S , also takes C to R and the circle ω to the circumcircle ω_1 of BSR . This implies that ω and ω_1 are tangent at B .

Note that $\angle RDQ = \angle DCA = \angle DPQ$, which means that the circumcircle ω_2 of the triangle PQD is tangent to the line RS at D .

Denote by K the intersection point of the line RS with the common tangent to ω and ω_1 at B . Then we have

$$\angle KBD = \angle KBR + \angle CBD = \angle DSB + \angle SBD = \angle KDB,$$

which implies that $KD = KB$. Therefore, the powers of the point K with respect to the circles ω and ω_2 are equal, so K lies on their radical axis. This implies that the points K, P and Q are collinear. Finally, we obtain

$$KR \cdot KS = KB^2 = KD^2 = KP \cdot KQ,$$

which shows that the points P, Q, R and S lie on a common circle.

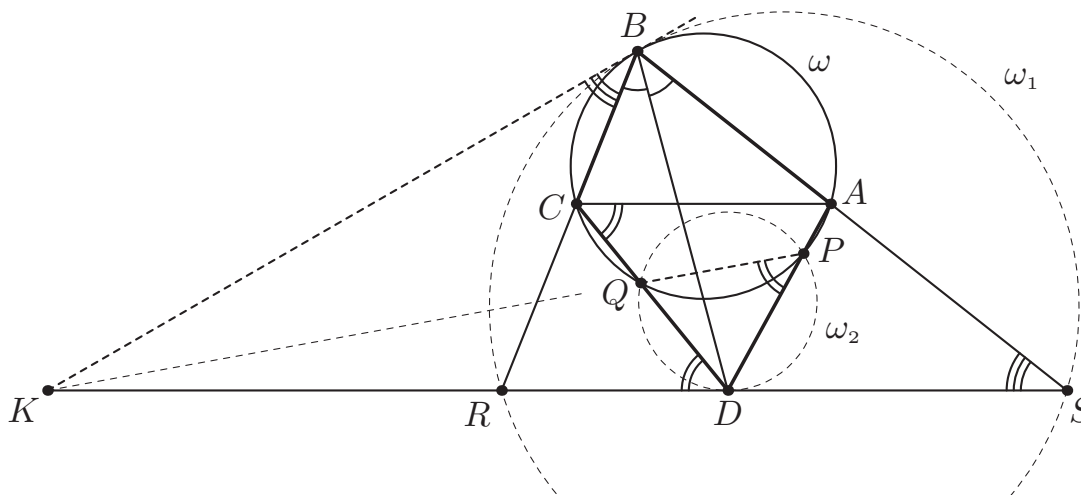


Figure 2



Solution 3. Denote by X' the image of the point X under some fixed inversion with center B . At the beginning of Solution 2 we noticed that the circumcircles of the triangles ABC and SBR are tangent at the point B . Therefore, the images of these two circles

under the considered inversion become two parallel lines $A'C'$ and $S'R'$ (see Figure 3).

Since D lies on the line RS and also on the angle bisector of the angle ABC , the point D' lies on the circumcircle of the triangle $BR'S'$ and also on the angle bisector of the angle $A'BC'$. Since the point P , other than A , is the intersection point of the line AD and the circumcircle of the triangle ABC , the point P' , other than A' , is the intersection point of the circumcircle of the triangle $BA'D'$ and the line $A'C'$. Similarly, the point Q' is the intersection point of the circumcircle of the triangle $BC'D'$ and the line $A'C'$.

Therefore, we obtain

$$\angle D'Q'P' = \angle C'BD' = \angle A'BD' = \angle D'P'Q'$$

and

$$\angle D'R'S' = \angle D'BS' = \angle R'BD' = \angle R'S'D'.$$

This implies that the points P' and S' are symmetric to the points Q' and R' with respect to the line passing through D' and perpendicular to the lines $A'C'$ and $S'R'$. Thus $P'S'R'Q'$ is an isosceles trapezoid, so the points P', S', R' and Q' lie on a common circle. Therefore, the points P, Q, R and S also lie on a common circle.

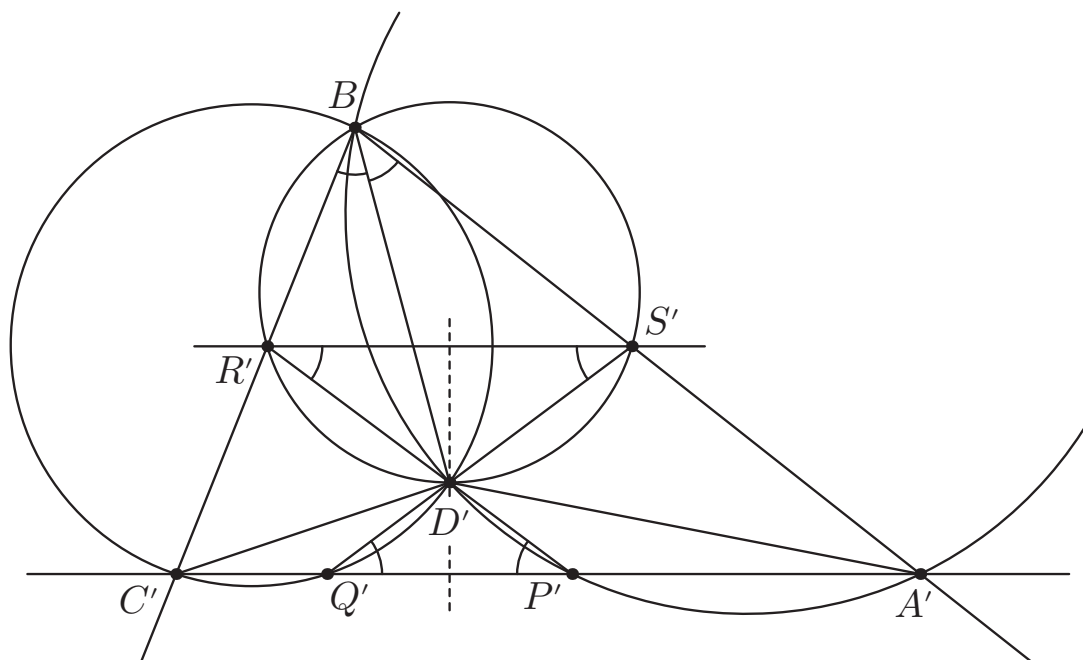


Figure 3



Problem 15

The sum of the angles A and C of a convex quadrilateral $ABCD$ is less than 180° . Prove that

$$AB \cdot CD + AD \cdot BC < AC(AB + AD).$$

Solution 1. Let ω be the circumcircle ABD . Then the point C is outside this circle, but inside the angle BAD . Let us apply the inversion with the center A and radius 1. This inversion maps the circle ω to the line $\omega' = B'D'$, where B' and D' are images of B and D . The point C goes to the point C' inside the triangle $AB'D'$. Therefore, $B'C' + C'D' < AB' + AD'$. Now, due to inversion properties, we have

$$B'C' = \frac{BC}{AB \cdot AC}, \quad C'D' = \frac{CD}{AC \cdot AD}, \quad AB' = \frac{1}{AB}, \quad AD' = \frac{1}{AD}.$$

Hence

$$\frac{BC}{AB \cdot AC} + \frac{CD}{AC \cdot AD} < \frac{1}{AB} + \frac{1}{AD}.$$

Multiplying by $AB \cdot AC \cdot AD$, we obtain the desired inequality. \blacktriangleleft

Solution 2. Consider an inscribed quadrilateral $A'B'C'D'$ with sides of the same lengths as $ABCD$ (such a quadrilateral exists, because we can draw these 4 sides in a big circle and afterwards continuously decrease its radius). Then $\angle B' + \angle D' = 180^\circ < \angle B + \angle D$. Therefore, $\angle B' < \angle B$ or $\angle D' < \angle D$ and hence $A'C' < AC$, by the cosine theorem.

So the inequality under consideration for $A'B'C'D'$ is stronger than that for $ABCD$. However, the inequality for $A'B'C'D'$ follows immediately from Ptolemy's theorem. \blacktriangleleft

Problem 16

Determine whether $712! + 1$ is a prime number.

Answer: It is composite.

Solution. We will show that 719 is a prime factor of given number (evidently, $719 < 712! + 1$). All congruences are considered modulo 719. By Wilson's theorem, $718! \equiv -1$. Furthermore,

$$713 \cdot 714 \cdot 715 \cdot 716 \cdot 717 \cdot 718 \equiv (-6)(-5)(-4)(-3)(-2)(-1) \equiv 720 \equiv 1.$$

Hence $712! \equiv -1$, which means that $712! + 1$ is divisible by 719.

We remark that 719 is the smallest prime greater than 712, so 719 is the smallest prime divisor of $712! + 1$. ◀

Problem 17

Do there exist pairwise distinct rational numbers x , y and z such that

$$\frac{1}{(x-y)^2} + \frac{1}{(y-z)^2} + \frac{1}{(z-x)^2} = 2014?$$

Answer: No.

Solution. Put $a = x - y$ and $b = y - z$. Then

$$\begin{aligned} \frac{1}{(x-y)^2} + \frac{1}{(y-z)^2} + \frac{1}{(z-x)^2} &= \frac{1}{a^2} + \frac{1}{b^2} + \frac{1}{(a+b)^2} \\ &= \frac{b^2(a+b)^2 + a^2(a+b)^2 + a^2b^2}{a^2b^2(a+b)^2} \\ &= \left(\frac{a^2 + b^2 + ab}{ab(a+b)} \right)^2. \end{aligned}$$

On the other hand, 2014 is not a square of a rational number. Hence, such numbers x, y, z do not exist. ◀

Problem 18

Let p be a prime number, and let n be a positive integer. Find the number of quadruples (a_1, a_2, a_3, a_4) with $a_i \in \{0, 1, \dots, p^n - 1\}$ for $i = 1, 2, 3, 4$ such that

$$p^n \mid (a_1 a_2 + a_3 a_4 + 1).$$

Answer: $p^{3n} - p^{3n-2}$.

Solution. We have $p^n - p^{n-1}$ choices for a_1 such that $p \nmid a_1$. In this case for any of the $p^n \cdot p^n$ choices of a_3 and a_4 , there is a unique choice of a_2 , namely,

$$a_2 \equiv a_1^{-1}(-1 - a_3 a_4) \pmod{p^n}.$$

This gives $p^{2n}(p^n - p^{n-1}) = p^{3n-1}(p-1)$ of quadruples.

If $p \mid a_1$ then we obviously have $p \nmid a_3$, since otherwise the condition

$$p^n \mid (a_1 a_2 + a_3 a_4 + 1)$$

is violated. Now, if $p \mid a_1$, $p \nmid a_3$, for any choice of a_2 there is a unique choice of a_4 , namely,

$$a_4 \equiv a_3^{-1}(-1 - a_1 a_2) \pmod{p^n}.$$

Thus, for these p^{n-1} choices of a_1 and $p^n - p^{n-1}$ choices of a_3 , we have for each of the p^n choices of a_2 a unique a_4 . So in this case there are $p^{n-1}(p^n - p^{n-1})p^n = p^{3n-2}(p-1)$ of quadruples.

Thus, the total number of quadruples is

$$p^{3n-1}(p-1) + p^{3n-2}(p-1) = p^{3n} - p^{3n-2}. \quad \blacktriangleleft$$

Problem 19

Let m and n be relatively prime positive integers. Determine all possible values of

$$\gcd(2^m - 2^n, 2^{m^2+mn+n^2} - 1).$$

Answer: 1 and 7.

Solution. Without restriction of generality we may assume that $m \geq n$. It is well known that

$$\gcd(2^p - 1, 2^q - 1) = 2^{\gcd(p,q)} - 1,$$

so

$$\begin{aligned} \gcd(2^m - 2^n, 2^{m^2+mn+n^2} - 1) &= \gcd(2^{m-n} - 1, 2^{m^2+mn+n^2} - 1) \\ &= 2^{\gcd(m-n, m^2+mn+n^2)} - 1. \end{aligned}$$

Let $d \geq 1$ be a divisor of $m - n$. Clearly, $\gcd(m, d) = 1$, since m and n are relatively prime. Assume that d also divides $m^2 + mn + n^2$. Then d divides $3m^2$. In view of $\gcd(m, d) = 1$ the only choices for d are $d = 1$ and $d = 3$. Hence $\gcd(m - n, m^2 + mn + n^2)$ is either 1 or 3. Consequently, $\gcd(2^m - 2^n, 2^{m^2+mn+n^2} - 1)$ may only assume the values $2^1 - 1 = 1$ and $2^3 - 1 = 7$.

Both values are attainable, since $m = 2, n = 1$ gives

$$\gcd(2^2 - 2^1, 2^{2^2+2 \cdot 1+1^2} - 1) = \gcd(2, 2^7 - 1) = 1,$$

whereas $m = 1, n = 1$ gives

$$\gcd(2^1 - 2^1, 2^{1^2+1 \cdot 1+1^2} - 1) = \gcd(0, 2^3 - 1) = 7. \quad \blacktriangleleft$$

Problem 20

Consider a sequence of positive integers a_1, a_2, a_3, \dots such that for $k \geq 2$ we have

$$a_{k+1} = \frac{a_k + a_{k-1}}{2015^i},$$

where 2015^i is the maximal power of 2015 that divides $a_k + a_{k-1}$. Prove that if this sequence is periodic then its period is divisible by 3.

Solution. If all the numbers in the sequence are even, then we can divide each element of the sequence by the maximal possible power of 2. In this way we obtain a new sequence of integers which is determined by the same recurrence formula and has the same period, but now it contains an odd number. Consider this new sequence modulo 2. Since the number 2015 is odd, it has no influence to the calculations modulo 2, so we may think that modulo 2 this sequence is given by the Fibonacci recurrence $a_{k+1} \equiv a_k + a_{k-1}$ with $a_j \equiv 1 \pmod{2}$ for at least one j . Then it has the following form $\dots, 1, 1, 0, 1, 1, 0, 1, 1, 0, \dots$ (with period 3 modulo 2), so that the length of the original period of our sequence (if it is periodic!) must be divisible by 3. ◀

Remark. It is not known whether a periodic sequence of integers satisfying the recurrence condition of this problem exists. The solution of such a problem is apparently completely out of reach. See, e.g., the recent preprint

BRANDON AVILA AND TANYA KHOVANOVA, *Free Fibonacci sequences*, 2014, preprint at <http://arxiv.org/pdf/1403.4614v1.pdf>

for more information. (The problem given at the olympiad is Lemma 28 of this paper, where 2015 can be replaced by any odd integer greater than 1.)